

March Maths Challenge

Choose a challenge to solve.

Challenge 1:


Jane reads a book.

- On Monday she reads 26 pages.
- On Tuesday she reads $\frac{2}{5}$ of the remaining pages.
- On Wednesday she reads the final 36 pages.

How many pages are in the book?

Challenge 2:

A toy train costs three times as much as a rocket.



The total cost of the train and rocket is £52

How much does the train cost?



Challenge 3:

A

B

C

D



?